



Noah's Ark Independent Primary School

Subject: History	Examiner: Matongo N.M.
Type: End of 3 rd Term Assmt.	Moderator: Rwizi, A.
Date: 12 September 2019	Grade: 5
Marks: 50 Marks	Time: 1 hour 15 minutes

Name: _____

Instructions:

Answer ALL the questions in the spaces provided.

Write neatly and legibly

Carefully read all questions before answering

1. Match the following words in column A to the correct meanings in column B. (5)

Column A	Answer	Column B
Mummy		a) People who write important information in a society.
Tomb		b) Egyptian writing made up of pictures and symbols.
Scribes		c) A grave which is a room or building.
Hieroglyphic		d) From a very long time ago.
Ancient		e) A dead body treated with herbs and oils to stop it from rotting.

2. Study the map below of Africa showing the location of the Nile River and answer the questions that follow.



2.1 What made it possible for people to make settlements in Egypt? (2)

2.2 Explain how the land along the river Nile became fertile. (2)

2.3 What machine was used by the ancient Egyptians to irrigate their fields? (1)

3. Arrange the following people in ancient Egypt from the most powerful to the least powerful. (5)

Word Bank				
Farmers	Scribes	Slaves and servants	Pharaohs	Vizier

4. Write down two skilled jobs that were done by the ancient Egypt. (2)

5. Why were the Pharaoh's dead bodies made into mummies? (1)

6. Explain why the Pharaohs were the most important people in ancient Egypt. (4)









7. Explain the following buildings built by the ancient Egyptians. (6)

7.1 Sphinx

7.2 Pyramid

7.3 Temples

8. Study the Egyptian alphabet below and answer the questions that follow.

A 	A 	B 	C/K 	D 
E/I/Y 	F/V 	G 	H 	H 
I/Y/E 	J 	L 	M 	M 
N 	N 	O/U/W 	P 	Q 
R 	S/Z 	SH/CH 	T 	TH 
U/W/O 	X 	Y/E/I 	Z/S 	

8.1 There were over _____ symbols and pictures in hieroglyphics. (1)

8.2 Use the Egyptian alphabet to construct the following words.

a. Table _____ (1)

8.3 Translate these hieroglyphics into English. (2)



9. What did the ancient Egyptians think the stars were? (1)

10. Explain what the ancient Egyptians used the sun, the moon, and the stars for. (2)

11. According to the ancient Egyptians, what was astronomy? (2)

12. A wooden toe was found on a mummy. How was this false toe useful? (1)

13. The Egyptian doctors were called _____. (1)

14. What was discovered by Howard Carter? (1)

15. Howard Carter was a/an _____ (1)

16. Write a short paragraph of about 8 lines explaining what we learn from the Tutankhamen. (5)

17. Explain the following people in the ancient Egyptian's social structure. (4)

17.1 Vizier: _____

17.2 Pharaoh: _____

17.3 Scribes: _____

17.4 Skilled workers: _____
